


1 Naslednja črka 1 točka

2 Zvezde 1 točka

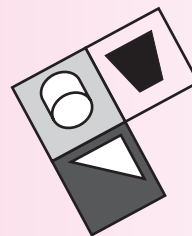
S, O, D, D



3 Slikovni test 1 točka

4 Pravilna oblika 1 točka

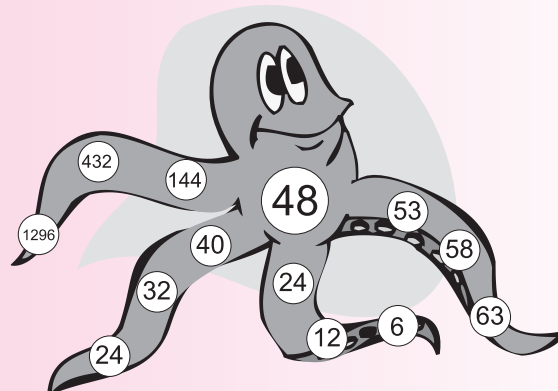
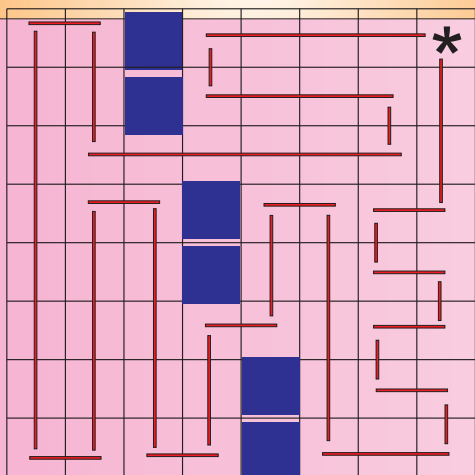
D



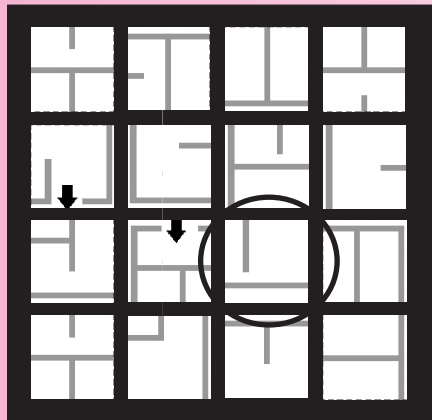
1

5 Pot tja in nazaj 2 točki

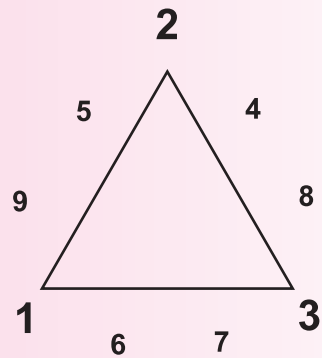
6 Hobotnica 2 točki



7 Labirint **2** točki



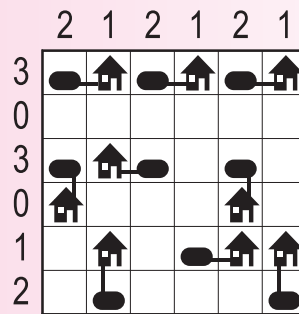
8 Čarobni trikotnik **2** točki



9 Negativi **2** točki

G

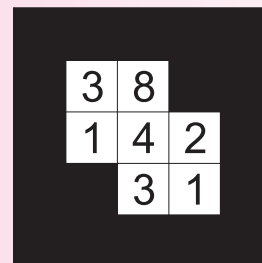
10 Arhitekt **3** točke



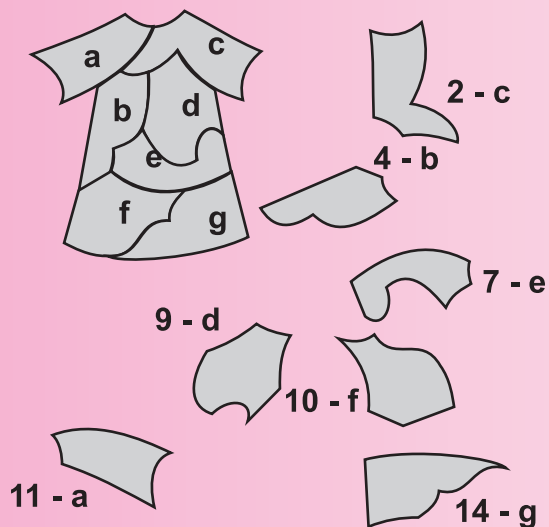
11 Pot s števili **3** točke

2	1	2	3	5	6	7	8	10
8	1	3	6	7	9	8	8	11
6	5	4	5	5	8	9	17	12
7	6	8	6	8	15	18	18	13
5	9	8	7	14	15	16	17	18
6	8	9	11	15	14	16	18	17
11	11	10	11	12	13	15	19	18
13	12	13	15	13	14	19	20	19
14	12	14	15	16	15	16	19	18

12 Kakuro **3** točke




13 Nova obleka **3** točke



14 Zavetišče za živali **3** točke

48 psov
32 mačk
16 zajcev

15 Prevozna sredstva **4** točke




3

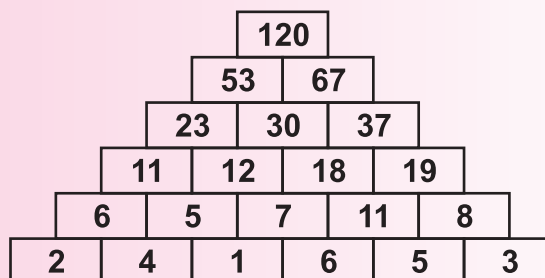
16 Dvojna števila **4** točke

$$56 + 90 + 96 = 242$$

17 Delci **4** točke



18 Piramida **4** točke



19 Kvadrati **4** točke

20 Kocka **5** točk

26

A+D