


1 Litera următoare 1 punct

2 Stele 1 punct

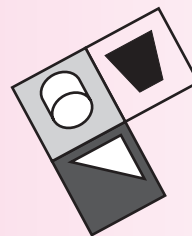
ș, ș, O, N



3 Test cu imagine 1 punct

4 Forma corectă 1 punct

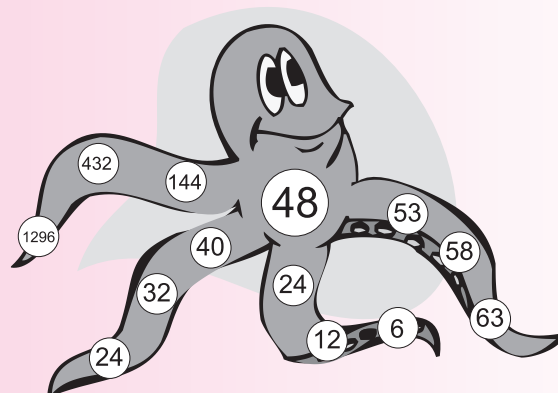
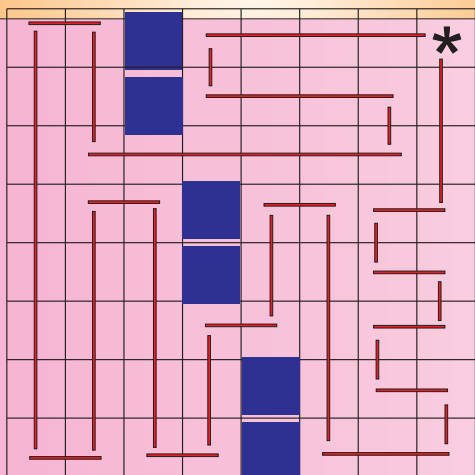
D



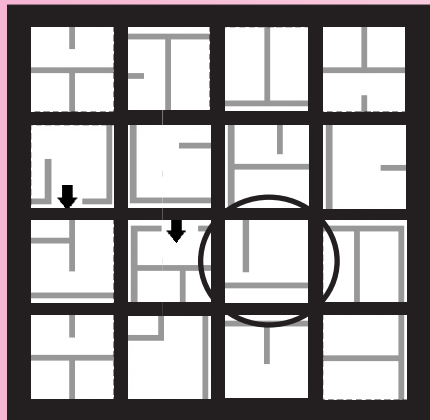
1

5 Drumul încolo și înapoi 2 puncte

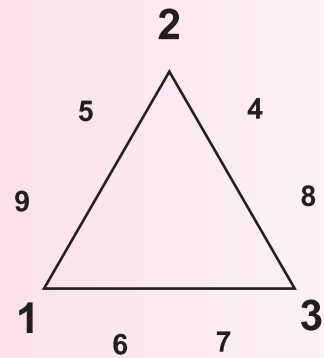
6 Caracatița 2 puncte



7 Labirint **2** puncte



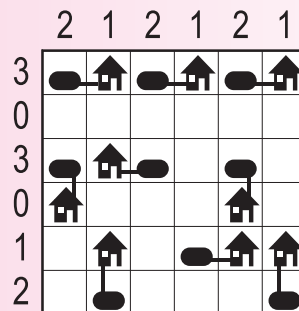
8 Triunghiul magic **2** puncte



9 Negativ **2** puncte

G


10 Arhitect **3** puncte



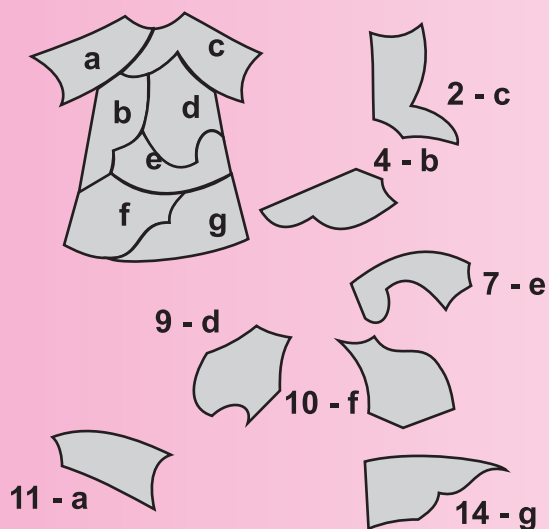
11 Drumul prin numere **3** puncte

2	1	2	3	5	6	7	8	10
8	1	3	6	7	9	8	8	11
6	5	4	5	5	8	9	17	12
7	6	8	6	8	15	18	18	13
5	9	8	7	14	15	16	17	18
6	8	9	11	15	14	16	18	17
11	11	10	11	12	13	15	19	18
13	12	13	15	13	14	19	20	19
14	12	14	15	16	15	16	19	18

12 Kakuro **3** puncte




13 Haine noi **3** puncte



14 Adăpostul animalelor **3** puncte

48 de câini
32 de pisici
16 iepuri

15 Mijloace de transport **4** puncte



3

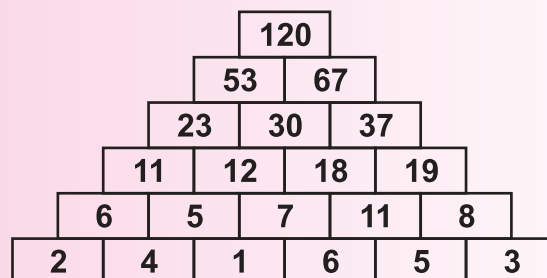
16 Numere de două cifre **4** puncte

$$56 + 90 + 96 = 242$$

17 Fragmente **4** puncte



18 Piramidă **4** puncte



19 Pătrățele **4** puncte

20 Cubul **5** puncte

26

A+D